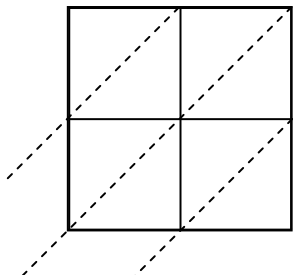


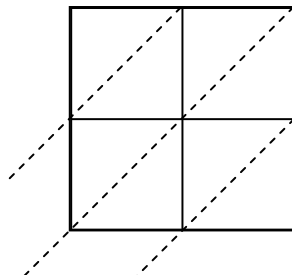


Use lattice multiplication to solve each problem.

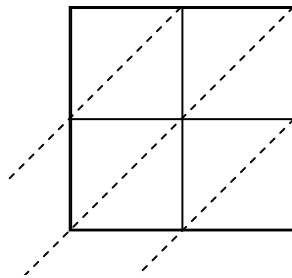
1) $78 \times 86 =$



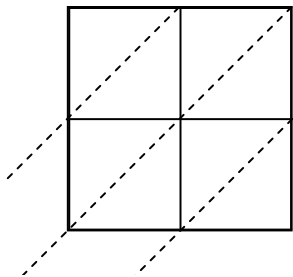
2) $81 \times 87 =$



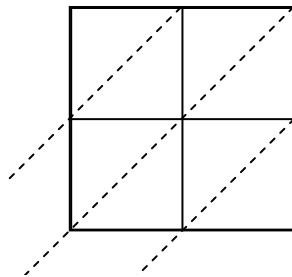
3) $31 \times 18 =$



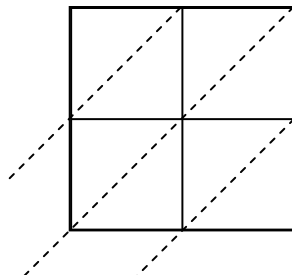
4) $99 \times 22 =$



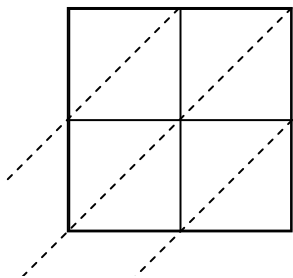
5) $98 \times 56 =$



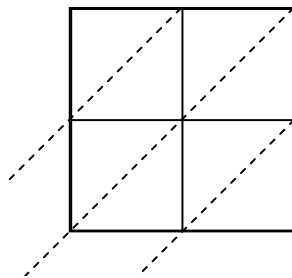
6) $93 \times 26 =$



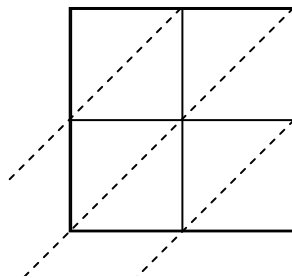
7) $44 \times 11 =$



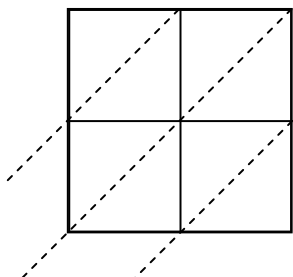
8) $56 \times 22 =$



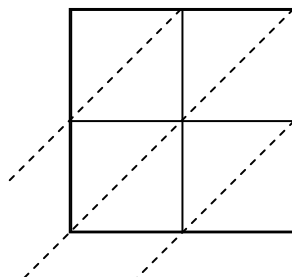
9) $52 \times 41 =$



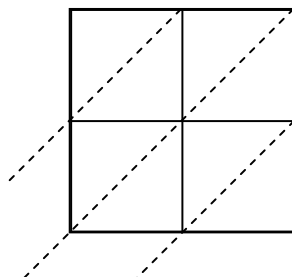
10) $47 \times 78 =$



11) $87 \times 90 =$



12) $53 \times 42 =$



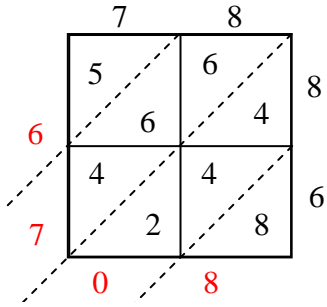
Answers

1. _____
2. _____
3. _____
4. _____
5. _____
6. _____
7. _____
8. _____
9. _____
10. _____
11. _____
12. _____

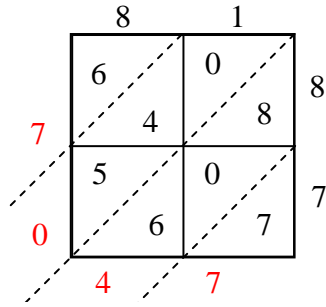


Use lattice multiplication to solve each problem.

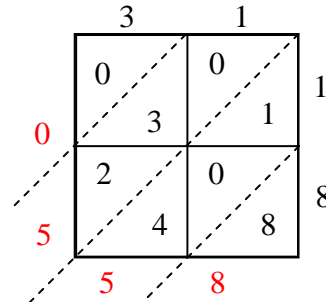
1) $78 \times 86 =$



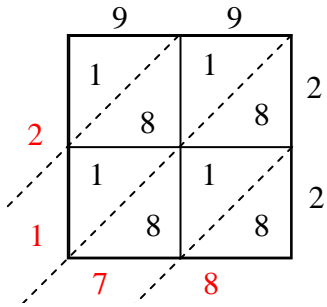
2) $81 \times 87 =$



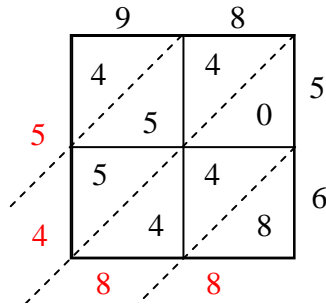
3) $31 \times 18 =$



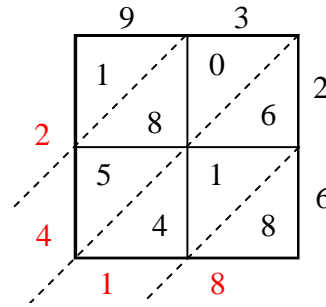
4) $99 \times 22 =$



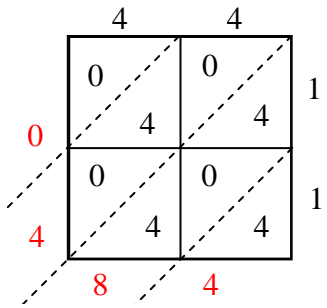
5) $98 \times 56 =$



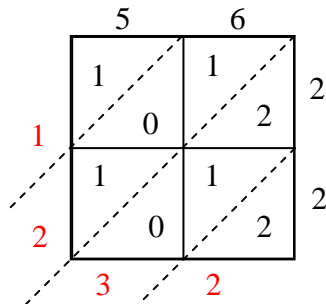
6) $93 \times 26 =$



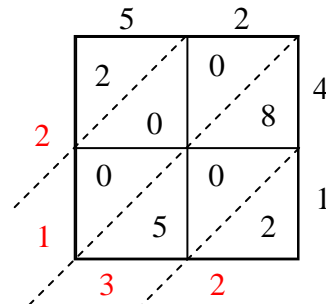
7) $44 \times 11 =$



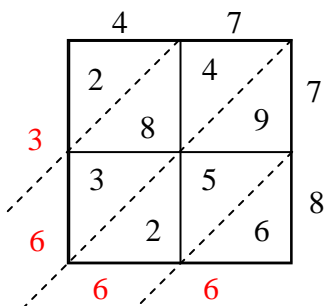
8) $56 \times 22 =$



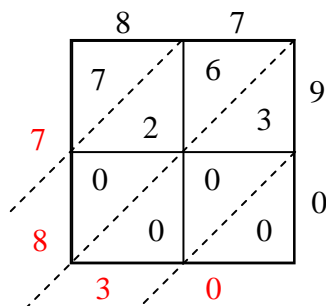
9) $52 \times 41 =$



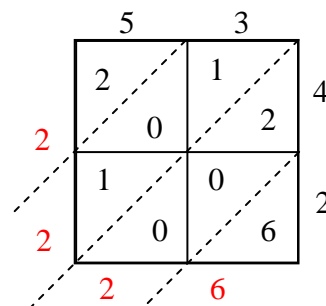
10) $47 \times 78 =$



11) $87 \times 90 =$



12) $53 \times 42 =$



Answers

1. 6,708
2. 7,047
3. 558
4. 2,178
5. 5,488
6. 2,418
7. 484
8. 1,232
9. 2,132
10. 3,666
11. 7,830
12. 2,226